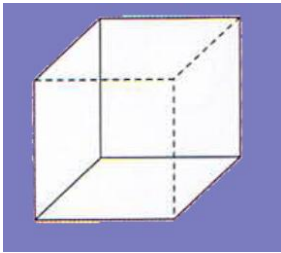


Name each of the shapes below and write how many faces, edges and vertices they have.

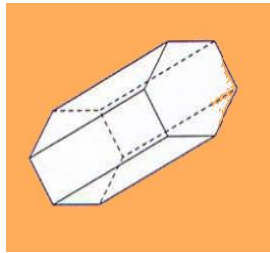


Shape -

Faces -

Edges -

Vertices -

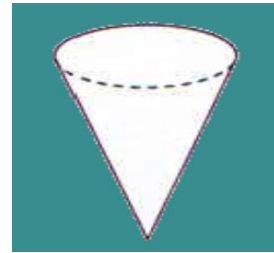


Shape -

Faces -

Edges -

Vertices -

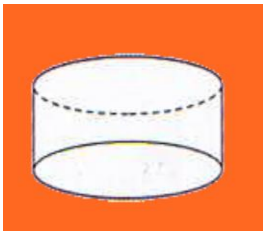


Shape -

Faces -

Edges -

Vertices -




Shape -

Faces -

Edges -

Vertices -

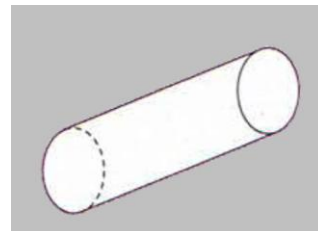


Shape -

Faces -

Edges -

Vertices -

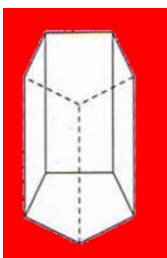


Shape -

Faces -

Edges -

Vertices -

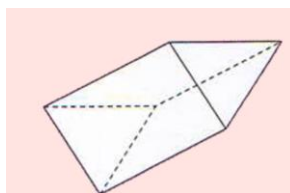


Shape -

Faces -

Edges -

Vertices -




Shape -

Faces -

Edges -

Vertices -



Shape -

Faces -

Edges -

Vertices -