


Name the shape made by each net. Write how many faces, edges and vertices each shape has.

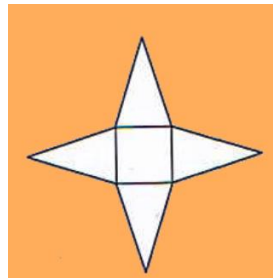


Shape -

Faces -

Edges -

Vertices -

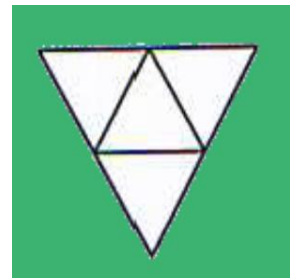


Shape -

Faces -

Edges -

Vertices -

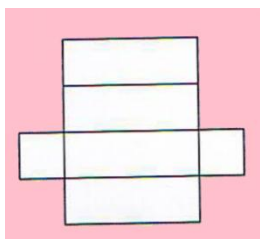


Shape -

Faces -

Edges -

Vertices -

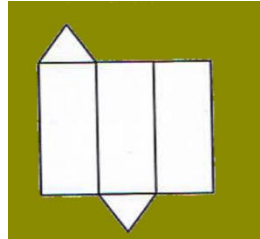


Shape -

Faces -

Edges -

Vertices -




Shape -

Faces -

Edges -

Vertices -



Shape -

Faces -

Edges -

Vertices -

Tick the shapes below that CAN be folded to make a cube....

